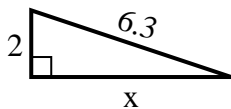


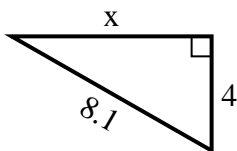


Find the value of X.

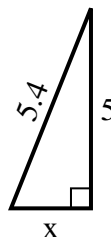
1) perimeter = 14.3 u



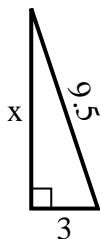
2) perimeter = 19.1 u



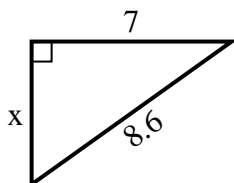
3) perimeter = 12.4 u



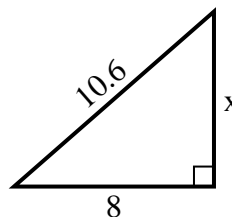
4) perimeter = 21.5 u



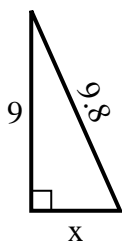
5) perimeter = 20.6 u



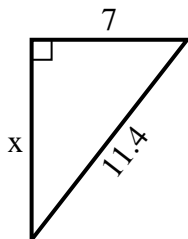
6) perimeter = 25.6 u



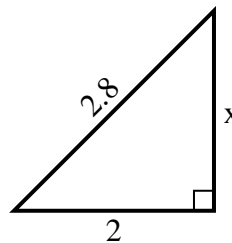
7) perimeter = 22.8 u



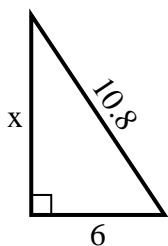
8) perimeter = 27.4 u



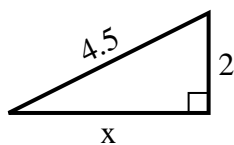
9) perimeter = 6.8 u



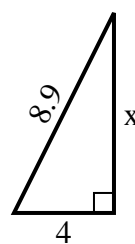
10) perimeter = 25.8 u



11) perimeter = 10.5 u



12) perimeter = 20.9 u



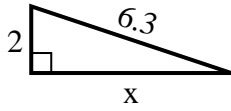
Answers

1. _____
2. _____
3. _____
4. _____
5. _____
6. _____
7. _____
8. _____
9. _____
10. _____
11. _____
12. _____

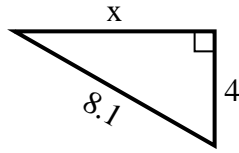


Find the value of X.

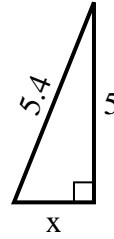
1) perimeter = 14.3 u



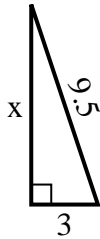
2) perimeter = 19.1 u



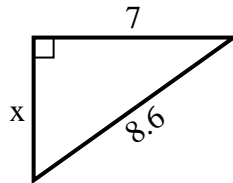
3) perimeter = 12.4 u



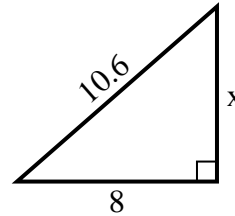
4) perimeter = 21.5 u



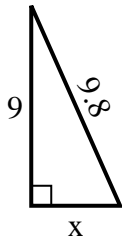
5) perimeter = 20.6 u



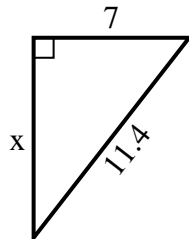
6) perimeter = 25.6 u



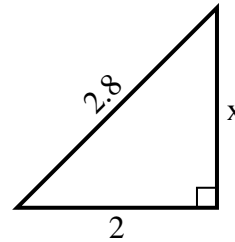
7) perimeter = 22.8 u



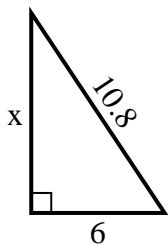
8) perimeter = 27.4 u



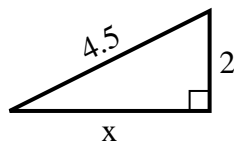
9) perimeter = 6.8 u



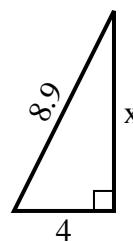
10) perimeter = 25.8 u



11) perimeter = 10.5 u



12) perimeter = 20.9 u



Answers

1. 6

2. 7

3. 2

4. 9

5. 5

6. 7

7. 4

8. 9

9. 2

10. 9

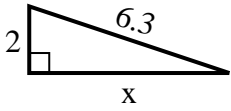
11. 4

12. 8

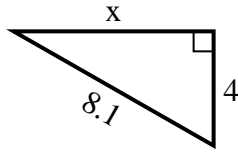


Find the value of X.

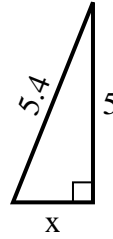
1) perimeter = 14.3 u



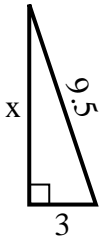
2) perimeter = 19.1 u



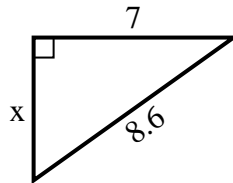
3) perimeter = 12.4 u



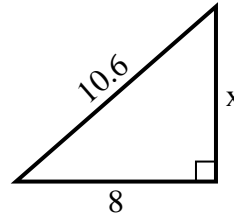
4) perimeter = 21.5 u



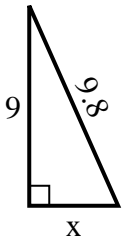
5) perimeter = 20.6 u



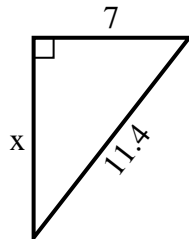
6) perimeter = 25.6 u



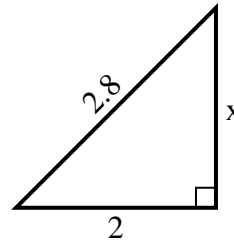
7) perimeter = 22.8 u



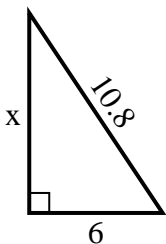
8) perimeter = 27.4 u



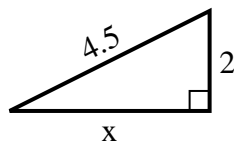
9) perimeter = 6.8 u



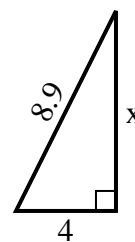
10) perimeter = 25.8 u



11) perimeter = 10.5 u



12) perimeter = 20.9 u



Answers

1. _____
2. _____
3. _____
4. _____
5. _____
6. _____
7. _____
8. _____
9. _____
10. _____
11. _____
12. _____